




NAWABEGH AL-RIYADH INTERNATIONAL SCHOOL

مدارس نوابغ الرياض العالمية

Science Revision





Name: _____

Date: _____

KG 3: _____

Q1. Write Water , Ground or Air under the Animals where they live:














Q2. Circle the animals with fur:

Put a tick for animals with feathers:

Put a cross for animals with scales



Q3. Choose the correct word how animals move:



Fly \ Swim



Swim \ Walk



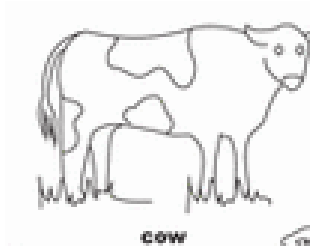
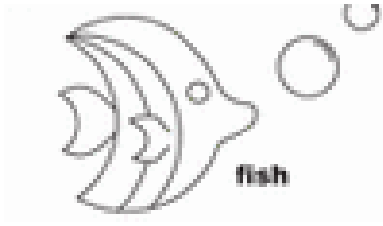
Fly \ Walk



Run \ Swim

Q4. Choose from the box and the body parts animals use to move:

Wings Fins Legs




Q5. Match the animals to their food they eat:



Plant Eater


Meat eater




Q6. Draw pictures of two animals, one that eats meat, one that eats plant:

Plant eater	Meat eater

Q7. Match the animals to their homes



Q8. Circle the food that animals eat



Q9. Write tick or cross:

1. A goat lives on the ground ()
2. A monkey lives in water. ()
3. An octopus lives in the air. ()
4. A dolphin lives in water. ()
5. You can see an ostrich in the air. ()

Q10. Choose and write the correct answer:

fins wings ground water

1. A horse lives on the _____
2. An octopus lives in _____
3. A fish has _____ to swim.
4. A birds has _____ to fly.