




NAWABEGH AL-RIYADH INTERNATIONAL SCHOOL

مدارس نوابغ الرياض العالمية

1st Semester 2024-2025

Math Revision



Name: _____

Date: _____

Class: KG 3 A

1. Write the numbers in order 1-30

I	II	21
IO	20	30

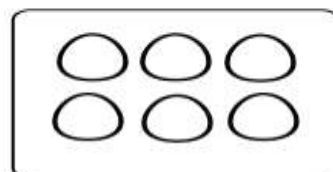
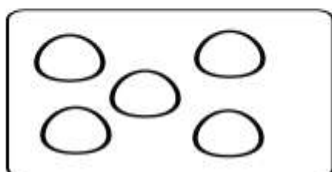
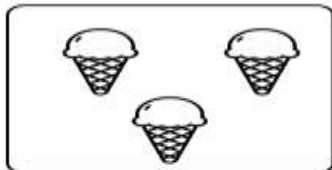
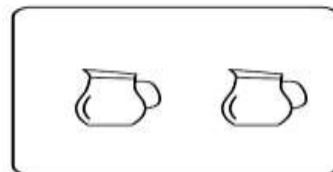
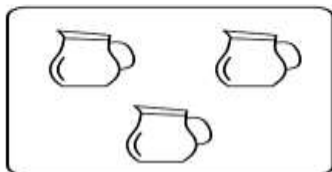


2. Write the missing numbers:

1				5
	7		9	
		13		15
	17		19	
		23		25
26			29	


3. What comes after:

21 ____	16 ____	12 ____
23 ____	25 ____	29 ____
27 ____	13 ____	15 ____
14 ____	17 ____	24 ____

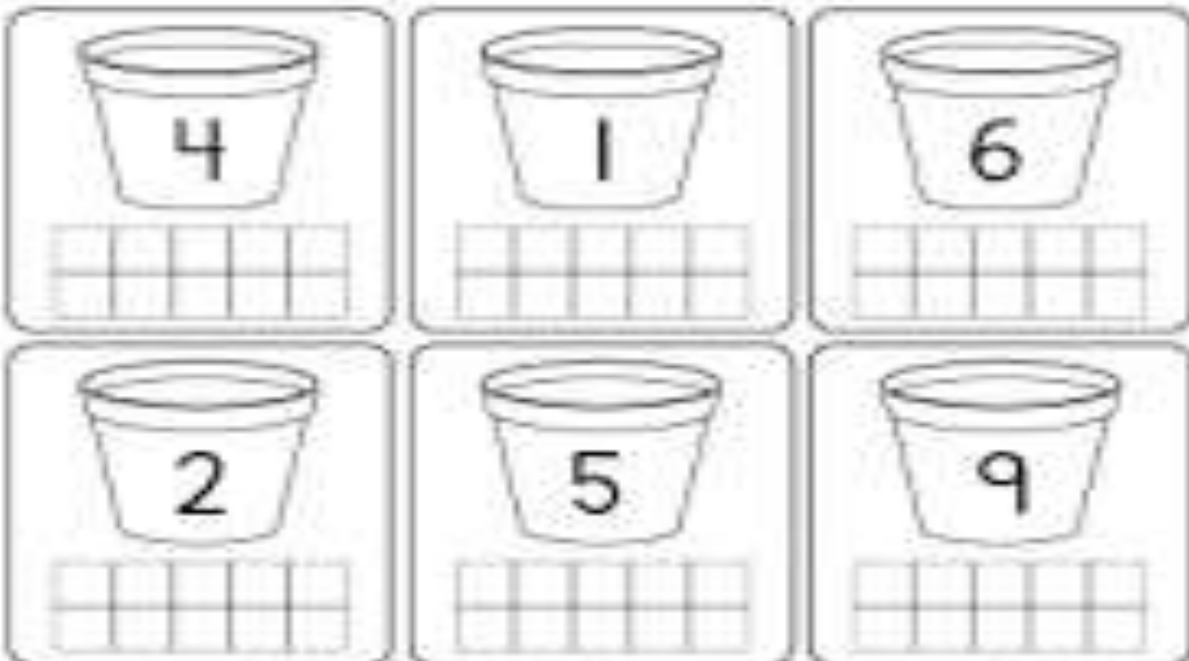
4. Count and write the number .



5.Circle the group that has more things



6. Draw the circles on ten frame for the given numbers:



7. Write the numbers in words:

nine eight six three five one ten
four seven two

1 <input type="text"/>	6 <input type="text"/>
2 <input type="text"/>	7 <input type="text"/>
3 <input type="text"/>	8 <input type="text"/>
4 <input type="text"/>	9 <input type="text"/>
5 <input type="text"/>	10 <input type="text"/>

8. Match the numbers to their words

three
eight
five
two
ten
seven
one
nine
four
six

5
2
3
7
8
9
10
4
6
1